

Math Review

9

Name _____


Day 1

1. My job is to write the numbers that come next.

11 _____, _____, _____

I can write the numbers that come next by counting in order.

3. My job is to draw dots to find how many in all.




$$5 + 6 = \underline{\quad}$$

I can find how many in all by drawing dots.

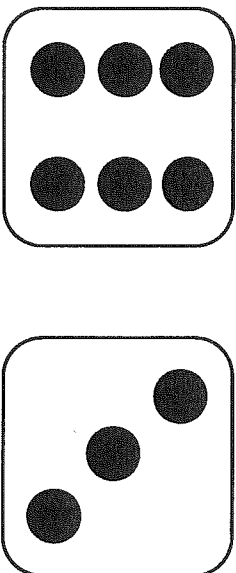
Name _____
Date _____

2. My job is to show and write the number twelve (12) on the ten frame.



I can show and write the number twelve (12). _____

4. My job is to find how many in all by locking the big number in my head and counting on.



$$\underline{\quad} + \underline{\quad} = \underline{\quad}$$

I can find how many in all by locking the big number in my head and counting on.

Name _____
Date _____

1. My job is to write the numbers that come next.


14 _____, _____, _____

I can write the numbers that come next by counting in order.

2. My job is to show and write the number eighteen (18) on the ten frame.

I can show and write the number eighteen (18).

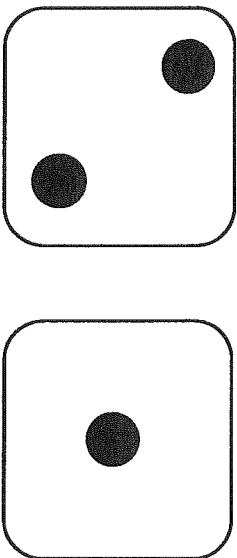
3. My job is to draw dots to find how many in all.



$$7 + 3 = \underline{\quad}$$

I can find how many in all by drawing dots.

4. My job is to find how many in all by locking the big number in my head and counting on.



$$\underline{\quad} + \underline{\quad} = \underline{\quad}$$

I can find how many in all by locking the big number in my head and counting on.

Name _____
Date _____

1. My job is to write the numbers that come next.


16 _____, _____, _____

I can write the numbers that come next by counting in order.

2. My job is to show and write the number fourteen (14) on the ten frame.

I can show and write the number fourteen (14). _____

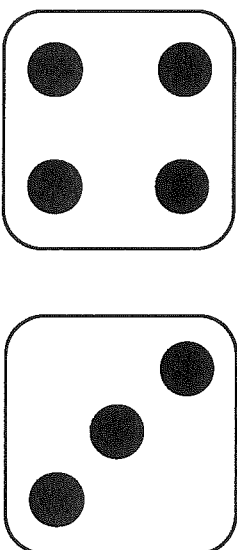
3. My job is to draw dots to find how many in all.



$$4 + 5 = \underline{\quad}$$

I can find how many in all by drawing dots.

4. My job is to find how many in all by locking the big number in my head and counting on.



$$\underline{\quad} + \underline{\quad} = \underline{\quad}$$

I can find how many in all by locking the big number in my head and counting on.

Name _____
Date _____

1. My job is to write the numbers that come next.


10 _____, _____, _____

I can write the numbers that come next by counting in order.

2. My job is to show and write the number eleven (11) on the ten frame.

I can show and write the number eleven (11).

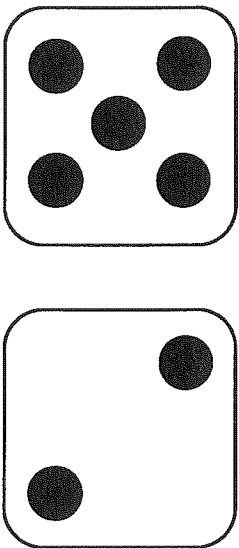
3. My job is to draw dots to find how many in all.



$$8 + 3 = \underline{\quad}$$

I can find how many in all by drawing dots.

4. My job is to find how many in all by locking the big number in my head and counting on.



$$\underline{\quad} + \underline{\quad} = \underline{\quad}$$

I can find how many in all by locking the big number in my head and counting on.

Name _____
Date _____

1. My job is to write the numbers that come next.


18 _____, _____, _____

I can write the numbers that come next by counting in order.

2. My job is to show and write the number twenty (20) on the ten frame.

I can show and write the number twenty (20). _____

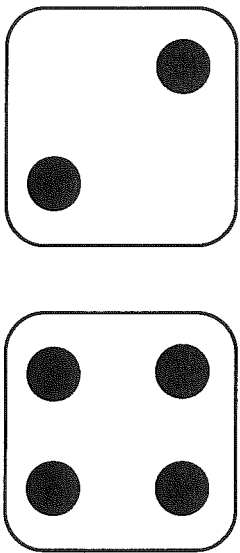
3. My job is to draw dots to find how many in all.



$$0 + 9 = \underline{\hspace{2cm}}$$

I can find how many in all by drawing dots.

4. My job is to find how many in all by locking the big number in my head and counting on.



$$\underline{\hspace{2cm}} + \underline{\hspace{2cm}} = \underline{\hspace{2cm}}$$

I can find how many in all by locking the big number in my head and counting on.

Name _____
Date _____

1. My job is to write the numbers that come next.


12 _____, _____, _____

I can write the numbers that come next by counting in order.

2. My job is to show and write the number nineteen (19) on the ten frame.

I can show and write the number nineteen (19).


3. My job is to draw dots to find how many in all.



$$6 + 6 = \underline{\quad}$$

I can find how many in all by drawing dots.

4. My job is to find how many in all by locking the big number in my head and counting on.



$$\underline{\quad} + \underline{\quad} = \underline{\quad}$$

I can find how many in all by locking the big number in my head and counting on.

Name _____
Date _____

1. My job is to write the numbers that come next.

15


_____, _____, _____

I can write the numbers that come next by counting in order.

2. My job is to show and write the number thirteen (13) on the ten frame.

I can show and write the number thirteen (13).

3. My job is to draw dots to find how many in all.



8



+

1

=

I can find how many in all by drawing dots.

4. My job is to find how many in all by locking the big number in my head and counting on.



+

=

_____ + _____ = _____

I can find how many in all by locking the big number in my head and counting on.

Name _____
Date _____

1. My job is to write the numbers that come next.


13 _____, _____, _____

I can write the numbers that come next by counting in order.

2. My job is to show and write the number fifteen (15) on the ten frame.

I can show and write the number fifteen (15).


3. My job is to draw dots to find how many in all.



$$4 + 6 = \underline{\quad}$$

I can find how many in all by drawing dots.

4. My job is to find how many in all by locking the big number in my head and counting on.



$$\underline{\quad} + \underline{\quad} = \underline{\quad}$$

I can find how many in all by locking the big number in my head and counting on.


Name _____
Date _____

1. My job is to write the numbers that come next.

11 _____, _____, _____


I can write the numbers that come next by counting in order.

2. My job is to show and write the number seventeen (17) on the ten frame.



I can show and write the number seventeen (17).


3. My job is to draw dots to find how many in all.



$$7 + 2 = \underline{\quad}$$

I can find how many in all by drawing dots.

4. My job is to find how many in all by locking the big number in my head and counting on.



$$\underline{\quad} + \underline{\quad} = \underline{\quad}$$

I can find how many in all by locking the big number in my head and counting on.

Name _____
Date _____

1. My job is to write the numbers that come next.


17 _____, _____, _____

I can write the numbers that come next by counting in order.

2. My job is to show and write the number twelve (12) on the ten frame.

I can show and write the number twelve (12). _____

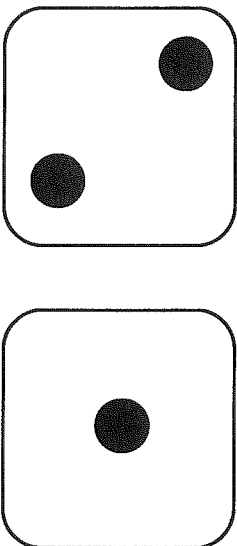
3. My job is to draw dots to find how many in all.



$$5 + 5 = \underline{\quad}$$

I can find how many in all by drawing dots.

4. My job is to find how many in all by locking the big number in my head and counting on.



$$\underline{\quad} + \underline{\quad} = \underline{\quad}$$

I can find how many in all by locking the big number in my head and counting on.