

Math Review

6

Name _____

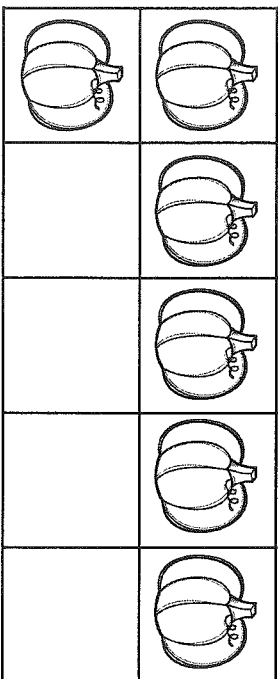
Day 1

1. My job is to find the missing numbers.

1 3 5

I can find the missing numbers by looking at the numbers before and after.


3. My job is to count the objects and write how many.



I can count the objects and write how many.

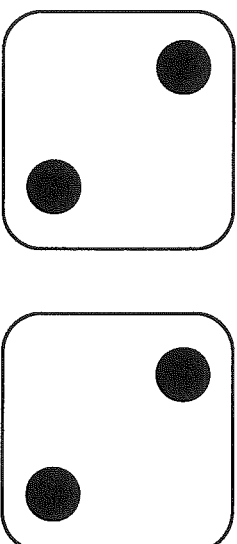
Name _____
Date _____

2. My job is to show and write the number ten (10) on the ten frame.



I can show and write the number ten (10).

4. My job is to count the dots to find how many in all.



I can count the dots and write how many in all.

Day 2


Name _____
Date _____

1. My job is to find the missing numbers.

0 _____ 2 _____ 4


I can find the missing numbers by looking at the numbers before and after.

3. My job is to count the objects and write how many.



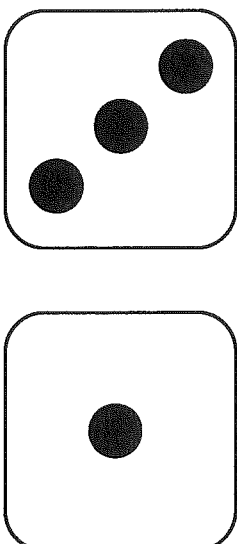
I can count the objects and write how many.

2. My job is to show and write the number seven (7) on the ten frame.



I can show and write the number seven (7).

4. My job is to count the dots to find how many in all.



I can count the dots and write how many in all.


Day 3

1. My job is to find the missing numbers.

3 5 7

I can find the missing numbers by looking at the numbers before and after.


3. My job is to count the objects and write how many.



I can count the objects and write how many.

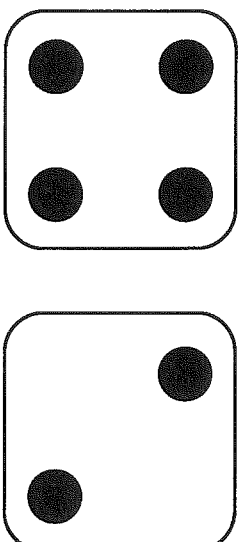
Name _____
Date _____

2. My job is to show and write the number eight (8) on the ten frame.



I can show and write the number eight (8).

4. My job is to count the dots to find how many in all.



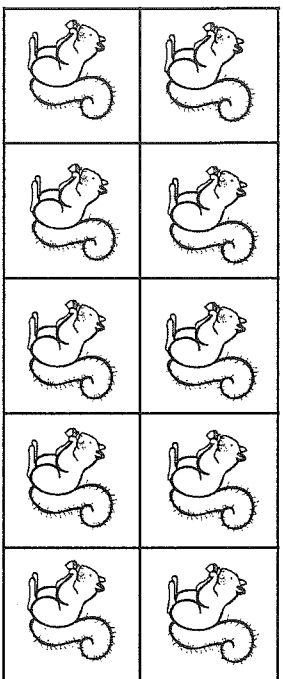
I can count the dots and write how many in all.

1. My job is to find the missing numbers.

_____ 1 _____ 3

I can find the missing numbers by looking at the numbers before and after.


3. My job is to count the objects and write how many.



I can count the objects and write how many.

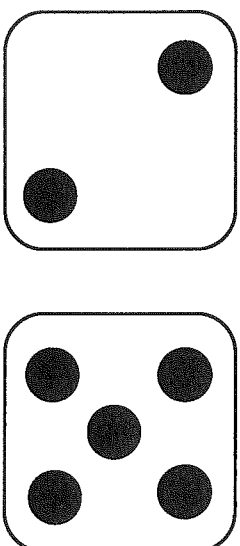
Name _____
Date _____

2. My job is to show and write the number nine (9) on the ten frame.



I can show and write the number nine (9).

4. My job is to count the dots to find how many in all.



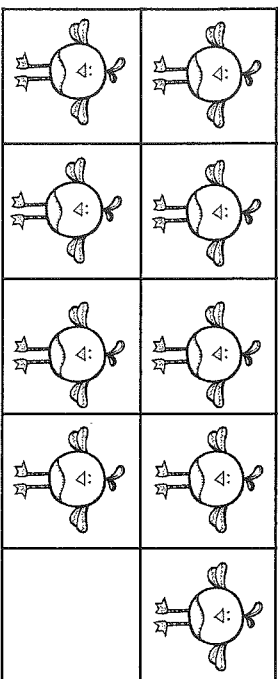
I can count the dots and write how many in all.

1. My job is to find the missing numbers.

2 _____ 4 _____ 6

I can find the missing numbers by looking at the numbers before and after.


3. My job is to count the objects and write how many.



I can count the objects and write how many.

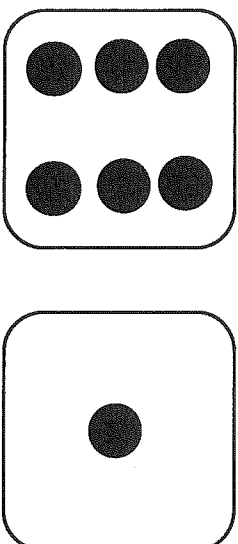
Name _____
Date _____

2. My job is to show and write the number six (6) on the ten frame.



I can show and write the number six (6).

4. My job is to count the dots to find how many in all.



I can count the dots and write how many in all.

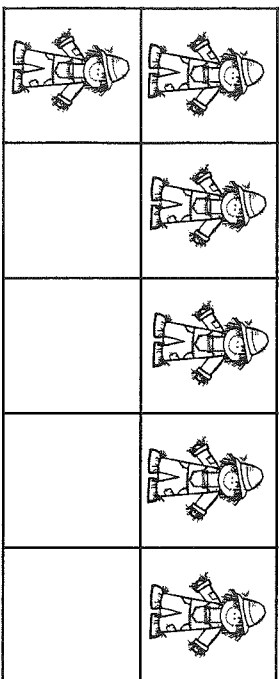
Name _____
Date _____

1. My job is to find the missing numbers.

4 _____ 6 _____ 8


I can find the missing numbers by looking at the numbers before and after.

3. My job is to count the objects and write how many.



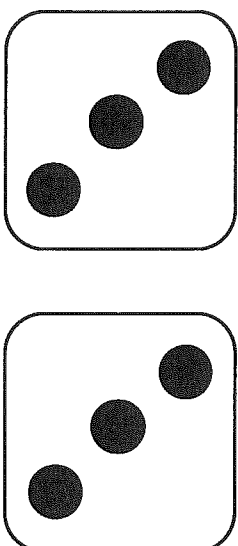
I can count the objects and write how many. _____

2. My job is to show and write the number seven (7) on the ten frame.



I can show and write the number seven (7). _____

4. My job is to count the dots to find how many in all.



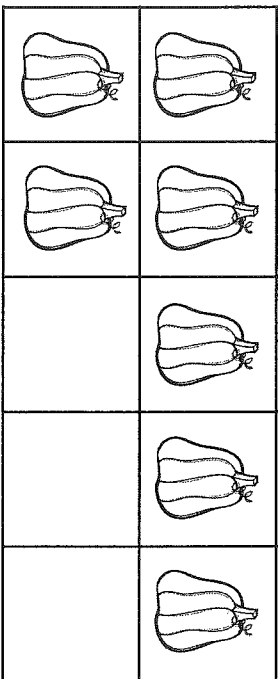
I can count the dots and write how many in all. _____

1. My job is to find the missing numbers.

_____ 1 _____ 3

I can find the missing numbers by looking at the numbers before and after.


3. My job is to count the objects and write how many.



I can count the objects and write how many.

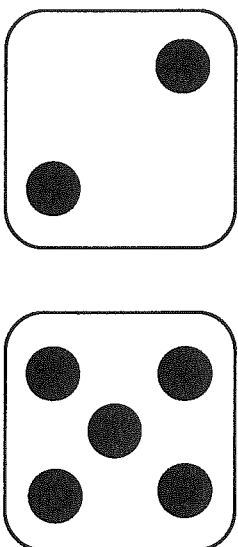
Name _____
Date _____

2. My job is to show and write the number eight (8) on the ten frame.



I can show and write the number eight (8).

4. My job is to count the dots to find how many in all.




I can count the dots and write how many in all.

1. My job is to find the missing numbers.

3 _____ 5 _____ 7

I can find the missing numbers by looking at the numbers before and after.


3. My job is to count the objects and write how many.



I can count the objects and write how many.


Name _____
Date _____

2. My job is to show and write the number ten (10) on the ten frame.



I can show and write the number ten (10).

4. My job is to count the dots to find how many in all.



I can count the dots and write how many in all.

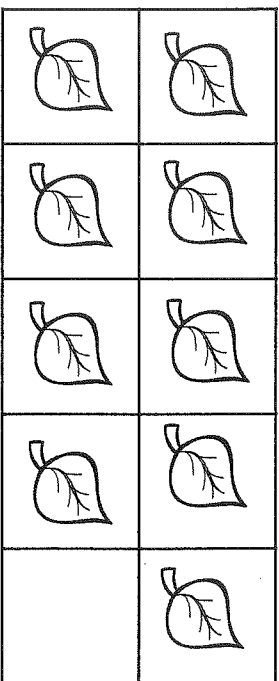
Day 9

1. My job is to find the missing numbers.

0 _____ 2 _____ 4

I can find the missing numbers by looking at the numbers before and after.


3. My job is to count the objects and write how many.



I can count the objects and write how many.

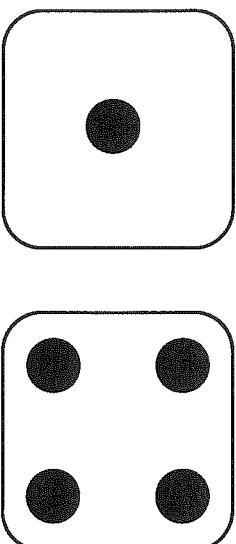
Name _____
Date _____

2. My job is to show and write the number nine (9) on the ten frame.



I can show and write the number nine (9).

4. My job is to count the dots to find how many in all.



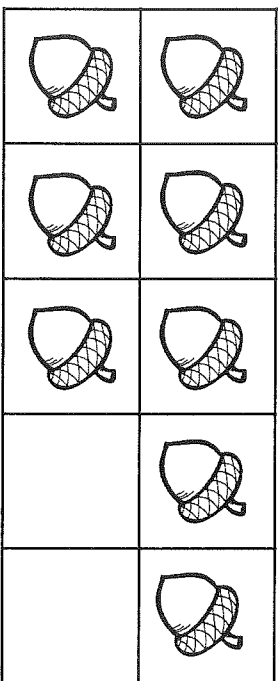
I can count the dots and write how many in all.

1. My job is to find the missing numbers.

2 _____ 4 _____ 6

I can find the missing numbers by looking at the numbers before and after.


3. My job is to count the objects and write how many.



I can count the objects and write how many.


Name _____
Date _____

2. My job is to show and write the number six (6) on the ten frame.



I can show and write the number six (6).

4. My job is to count the dots to find how many in all.



I can count the dots and write how many in all.
