

Math Review

5

Name _____

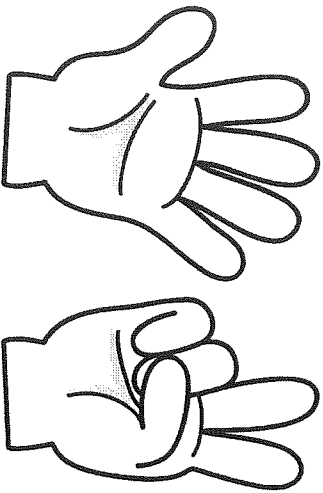
Name _____
Date _____

1. My job is to find the missing number.

_____ 1 2 3 4 5

I can find the missing number by counting in order.

3. My job is to count the fingers and write how many.




I can count the fingers and write how many. _____

2. My job is to show and write the number six (6) on the ten frame.

I can show and write the number six (6). _____

4. My job is to draw dots to show how many.



5

I can draw dots to show how many. _____

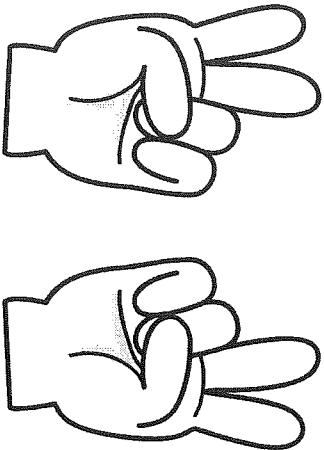
Day 2

1. My job is to find the missing number.

0 1 2 3 ____ 5

I can find the missing number by counting in order.

3. My job is to count the fingers and write how many.




I can count the fingers and write how many. _____

Name _____
Date _____

2. My job is to show and write the number eight (8) on the ten frame.

I can show and write the number eight (8). _____

4. My job is to draw dots to show how many.



3

I can draw dots to show how many. _____

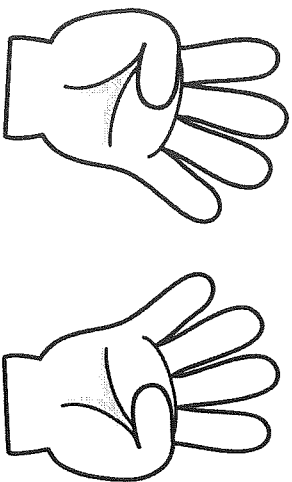
Day 3

1. My job is to find the missing number.

0 1 2 ____ 4 5

I can find the missing number by counting in order.

3. My job is to count the fingers and write how many.




I can count the fingers and write how many. _____

Name _____
Date _____

2. My job is to show and write the number five (5) on the ten frame.

I can show and write the number five (5). _____

4. My job is to draw dots to show how many.



4

I can draw dots to show how many. _____

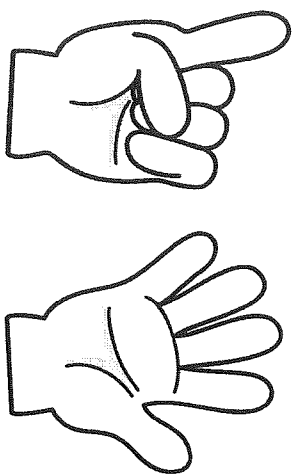
Name _____
Date _____

1. My job is to find the missing number.

0 _____ 2 3 4 5

I can find the missing number by counting in order.

3. My job is to count the fingers and write how many.




I can count the fingers and write how many. _____

2. My job is to show and write the number ten (10) on the ten frame.

I can show and write the number ten (10). _____

4. My job is to draw dots to show how many.



6

I can draw dots to show how many. _____

Day 5

Name _____
Date _____

1. My job is to find the missing number.

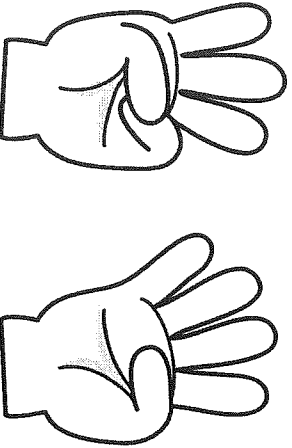
0 1 2 3 4 _____

I can find the missing number by counting in order.

2. My job is to show and write the number nine (9) on the ten frame.


I can show and write the number nine (9).

3. My job is to count the fingers and write how many.



I can count the fingers and write how many.

4. My job is to draw dots to show how many.



2

I can draw dots to show how many.

Day 6

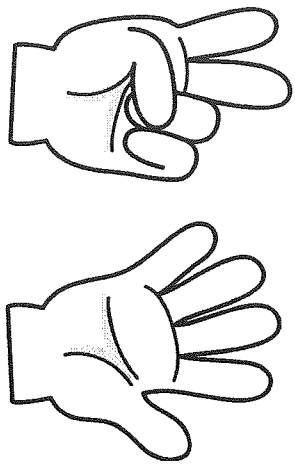
Name _____
Date _____

1. My job is to find the missing number.

0 1 _____ 3 4 5

I can find the missing number by counting in order.

3. My job is to count the fingers and write how many.




I can count the fingers and write how many. _____

2. My job is to show and write the number four (4) on the ten frame.

I can show and write the number four (4). _____

4. My job is to draw dots to show how many.



1

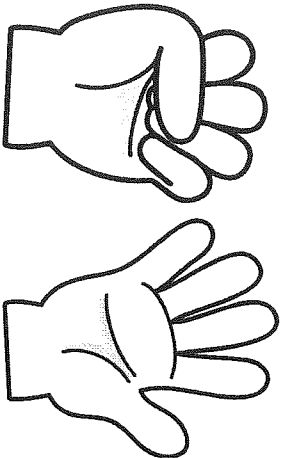
I can draw dots to show how many. _____

1. My job is to find the missing number.

0 1 2 3 ____ 5

I can find the missing number by counting in order.

3. My job is to count the fingers and write how many.




I can count the fingers and write how many.

Name _____
Date _____

2. My job is to show and write the number six (6) on the ten frame.

I can show and write the number six (6).

4. My job is to draw dots to show how many.



5

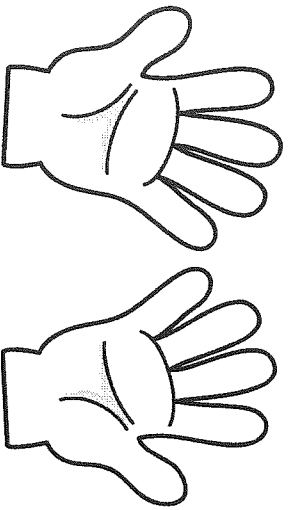
I can draw dots to show how many.

1. My job is to find the missing number.

_____ 1 2 3 4 5

I can find the missing number by counting in order.

3. My job is to count the fingers and write how many.




I can count the fingers and write how many. _____

2. My job is to show and write the number seven (7) on the ten frame.

I can show and write the number seven (7). _____

4. My job is to draw dots to show how many.



3

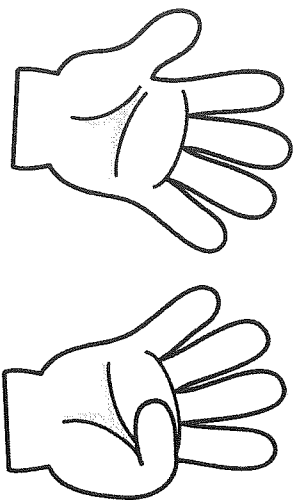
I can draw dots to show how many. _____

1. My job is to find the missing number.

0 _____ 2 3 4 5

I can find the missing number by counting in order.

3. My job is to count the fingers and write how many.




I can count the fingers and write how many. _____

Name _____
Date _____

2. My job is to show and write the number nine (9) on the ten frame.

I can show and write the number nine (9). _____

4. My job is to draw dots to show how many.



6 _____

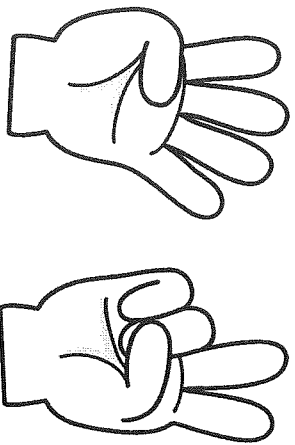
I can draw dots to show how many. _____

1. My job is to find the missing number.

0 1 2 3 ____ 5

I can find the missing number by counting in order.

3. My job is to count the fingers and write how many.




I can count the fingers and write how many. _____

Name _____
Date _____

2. My job is to show and write the number ten (10) on the ten frame.

I can show and write the number ten (10). _____

4. My job is to draw dots to show how many.



I can draw dots to show how many. _____

2